

name \_\_\_\_\_

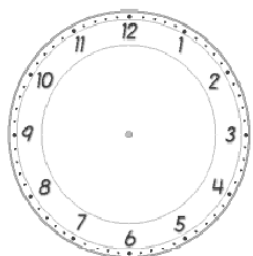
**Year One Maths Homework**



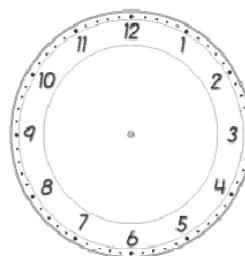
*This homework relates to Maths work covered in class this week. Children are revising telling the time, in analogue format, in terms of o'clock and half-past. Help your child to read the time and then record it on the blank clocks below. Remind your child to make sure that the "hour hand" extends **beyond** the numbers on the clock face. When recording "half-past", remind your child that the "minute hand" should be positioned **between** the numbers on the clock face.*

**o'clock**

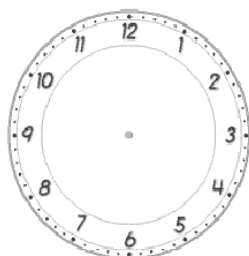
**Draw the hands on the analogue clocks to show the right time.**



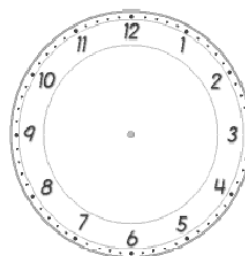
**10 o'clock**



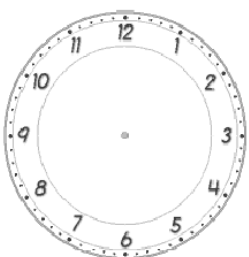
**5 o'clock**



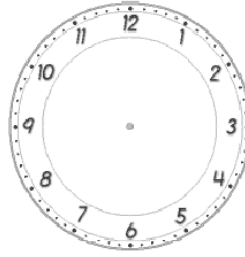
**1 o'clock**



**9 o'clock**



**6 o'clock**



**5 o'clock**

*Please see your child's class teacher if you have any further questions on this particular piece of homework or to find out how to provide additional support/extension work.*

This homework is due back to school on Friday.

Parent's Signature: \_\_\_\_\_

