
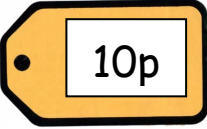



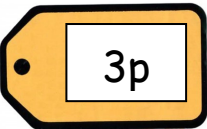

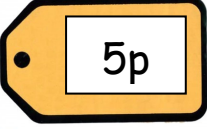

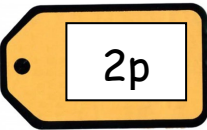


Name \_\_\_\_\_

**Year One Maths Homework**

This homework relates to Maths work covered in class this week.

- Children are using 1p, 2p, 5p and 10p coins to make amounts.
- Ask a grown up for some 1p, 2p, 5p and 10p coins.
- Which coins would you need to buy these things?
- Draw the coins you would use.

|   |  |
|---|--|
|       |  |
|      |  |
|   |  |
|   |  |
|   |  |

Unless otherwise stated, we expect your child to complete these tasks independently. Please see your child's class teacher if you have any further questions on this particular piece of homework or to find out how to provide additional support/extension work.

This homework is due back to school on Friday.

Parent's Signature: \_\_\_\_\_