















Name _____

Year One Maths Homework

This homework relates to Maths work covered in class this week - adding.

Add the flowers together. How many?	Use your fingers to add these numbers. How many?
 +  =	$7 + 3 =$
 +  =	$8 + 2 =$
 +  =	$6 + 4 =$
 +  =	$5 + 5 =$
 +  =	$1 + 9 =$
 +  =	$10 + 0 =$
 +  =	$4 + 6 =$

We expect your child to complete these tasks independently. Please see your child's class teacher if you have any further questions on this particular piece of homework or to find out how to provide additional support/extension work.

This homework is due back to school next FRIDAY.

Parent's Signature: _____

Remember - this activity, and others like it, can be downloaded from our School Website:

<http://www.thamesview-i.bardaglea.org.uk/index.htm>