


Numbers

1	2	3	4	5	6	7	8	9	10
11	12	13	14	15	16	17	18	19	20
21	22	23	24	25	26	27	28	29	30
31	32	33	34	35	36	37	38	39	40
41	42	43	44	45	46	47	48	49	50
51	52	53	54	55	56	57	58	59	60
61	62	63	64	65	66	67	68	69	70
71	72	73	74	75	76	77	78	79	80
81	82	83	84	85	86	87	88	89	90
91	92	93	94	95	96	97	98	99	100

Put the numbers in the correct order.

2	_____	12	_____
8	_____	17	_____
4	_____	13	_____
7	_____	11	_____
1	_____	19	_____
10	_____	20	_____
3	_____	14	_____
9	_____	16	_____
5	_____	18	_____
6	_____	15	_____

What did you eat at the weekend?
Write a sentence and draw a picture.



Who did you play with at the weekend? What game did you play?

Put a circle around the correct amount of objects,



6 apples



10 cacti



13 cars



4 cats



5 bananas



9 flowers

Add the numbers together?

$2+8=$

$1+9=$

$4+3=$

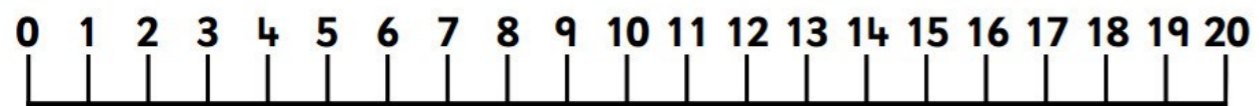
$9+2=$

$3+6=$

$3+5=$

1 <i>One</i>	2 <i>Two</i>	3 <i>Three</i>	4 <i>Four</i>
5 <i>Five</i>	6 <i>Six</i>	7 <i>Seven</i>	8 <i>Eight</i>
9 <i>Nine</i>	10 <i>Ten</i>	11 <i>Eleven</i>	12 <i>Twelve</i>
13 <i>Thirteen</i>	14 <i>Fourteen</i>	15 <i>Fifteen</i>	16 <i>Sixteen</i>
17 <i>Seventeen</i>	18 <i>Eighteen</i>	19 <i>Nineteen</i>	20 <i>Twenty</i>

My 0 to 20 number line



Can you fill in the missing numbers?

	2	3		5	6	7	8	9	10		12		14		16	17	18		20
--	---	---	--	---	---	---	---	---	----	--	----	--	----	--	----	----	----	--	----

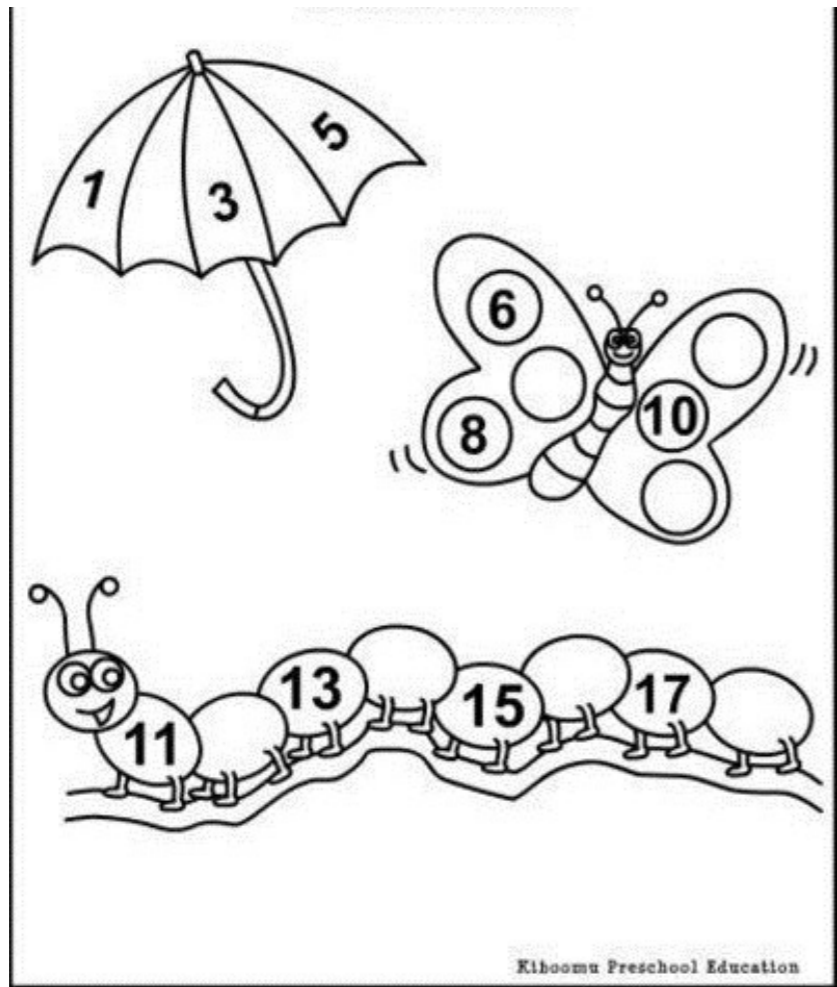
1		3	4		6	7			10	11		13	14		16	17		19	20
---	--	---	---	--	---	---	--	--	----	----	--	----	----	--	----	----	--	----	----

1	2		4		6	7		9	10	11		13	14		16	17			20
---	---	--	---	--	---	---	--	---	----	----	--	----	----	--	----	----	--	--	----

1	2	3			6	7		9	10		12		14	15	16		18	19	20
---	---	---	--	--	---	---	--	---	----	--	----	--	----	----	----	--	----	----	----

1		3	4		6	7	8		10	11	12		14	15		17		19	
---	--	---	---	--	---	---	---	--	----	----	----	--	----	----	--	----	--	----	--

	2		4	5		7		9		11	12		14	15		17		19	20
--	---	--	---	---	--	---	--	---	--	----	----	--	----	----	--	----	--	----	----



Count how many, add 1 more and write the sum.

