



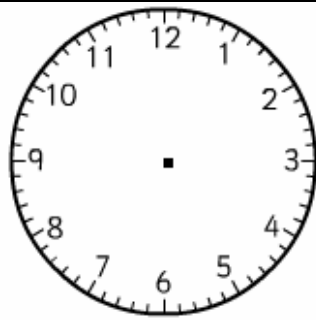
name _____

Year Two Maths Homework

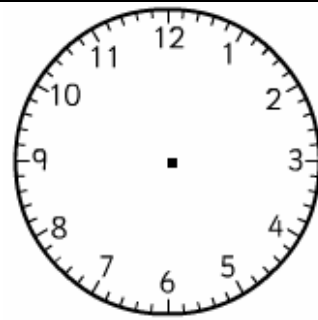
This homework relates to Maths work covered in class this week. Children are learning to tell the time in terms of $\frac{1}{4}$ past/to the hour in both digital and analogue formats. Children should read the time and then complete the analogue and digital clocks. Please make sure that 'the long hand of the digital clock extends beyond the numbers on the dial.'

$\frac{1}{4}$ to and $\frac{1}{4}$ past

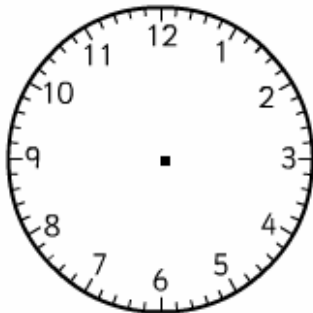
1. Read the time.
2. Complete the digital and analogue clocks.



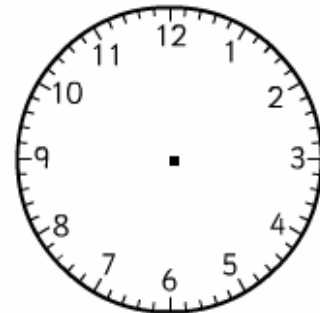
$\frac{1}{4}$ past 2



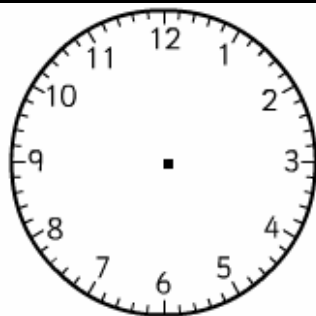
$\frac{1}{4}$ to 3



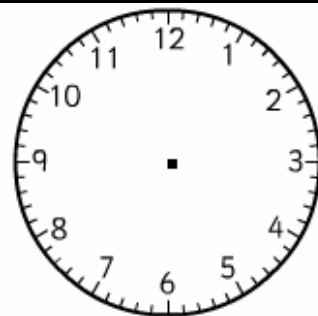
$\frac{1}{4}$ to 1



$\frac{1}{4}$ past 9



$\frac{1}{4}$ past 12



$\frac{1}{4}$ to 6

Unless otherwise stated, we expect your child to complete these tasks independently. Please see your child's class teacher if you have any further questions on this particular piece of homework or to find out how to provide additional support/extensionwork.

This homework is due back to school on Friday.

Parent's Signature: _____