

name _____

Year Two Maths Homework

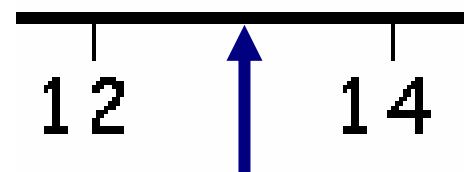
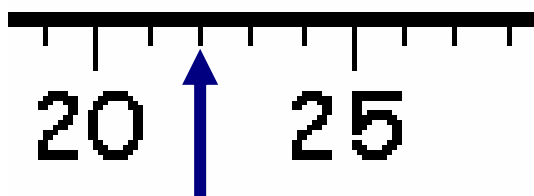
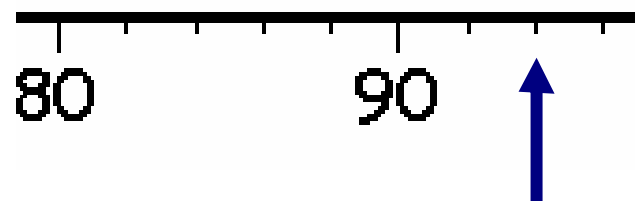
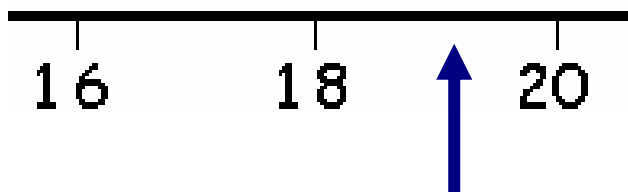
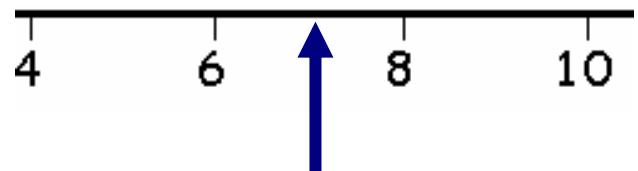
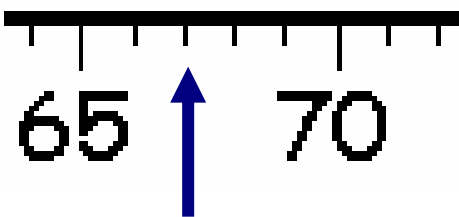
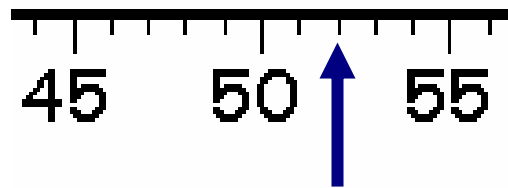
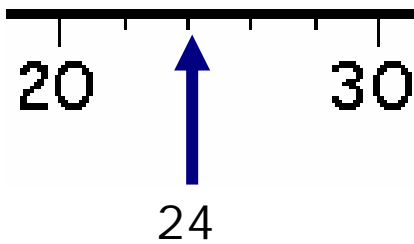


This homework relates to Maths work covered in class this week. Children have been applying their knowledge of multiples of 2s, 5s and 10s when reading measurement 'scales' during weight and capacity lessons.

Reading Scales

Closely look at these scales.

Write down the number that the arrow is pointing to.
To help you, you might need to count in 2s, 5s or 10s.



Unless otherwise stated, we expect your child to complete these tasks independently. Please see your child's class teacher if you have any further questions on this particular piece of homework or to find out how to provide additional support/extension work.

This homework is due back to school on Friday.

Parent's Signature: _____