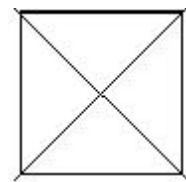
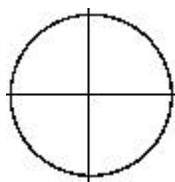

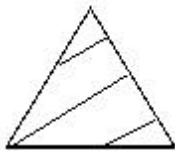
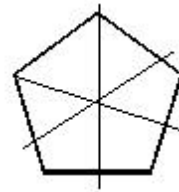
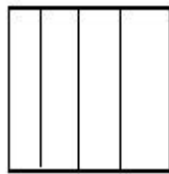
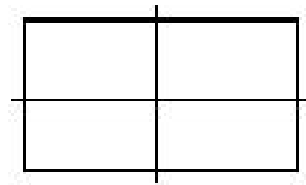
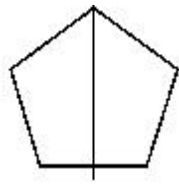


name _____

Year Two Maths Homework

This homework relates to Maths work covered in class this week. Children are identifying halves (2 equal parts) and quarters (4 equal parts) of 2D shapes.

These shapes should have been divided into halves and quarters! Have a look at each one. If it has been divided into halves, colour one half **red** and write " $\frac{1}{2}$ ". If it has been divided into quarters, colour one quarter **blue** and write " $\frac{1}{4}$ ". Can you find the mistakes? Leave these blank!



Unless otherwise stated, we expect your child to complete these tasks independently. Please see your child's class teacher if you have any further questions on this particular piece of homework or to find out how to provide additional support/extension work.

This homework is due back to school on Friday.

Parent's Signature: _____