




name _____

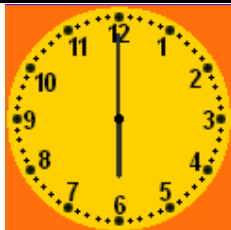
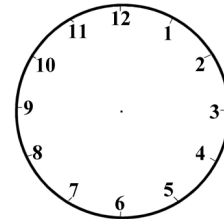
Year Two Maths Homework

This homework relates to Maths work covered in class this week. Children are telling the time in terms of "o'clock" and "1/2 past" in both analogue and digital formats.

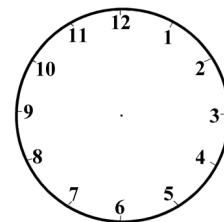
Have a look at these clocks. Some are analogue clocks, some are digital clocks. Write the time underneath each.



Draw the hands to show 1 hour later



Draw the hands to show 1 and a half hours later



Unless otherwise stated, we expect your child to complete these tasks independently. Please see your child's class teacher if you have any further questions on this particular piece of homework or to find out how to provide additional support/extension work.

This homework is due back to school on Friday.

Parent's Signature: _____