

name _____

Year Two Maths Homework




This homework relates to Maths work covered in class this week.

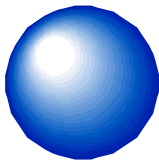
Children have been revising giving change from 20p.

Shopping with 3D shapes:

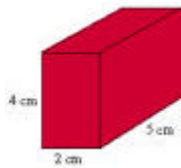
Pretend you are visiting a "3D Shape Shop". Choose 2 3D shapes to buy. Write the sum and then calculate how much change you'll need from 20p.




cylinder - 2p



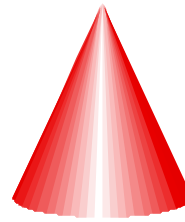
sphere - 3p



cuboid - 4p



cube - 10p



cone - 1p



pyramid - 5p

My Sum:

Change from 20p:

My Sum:	Change from 20p:

We expect your child to complete these tasks independently. Please see your child's class teacher if you have any further questions on this particular piece of homework or to find out how to provide additional support/extension work.

This homework is due back to school next **FRI DAY**.

Parent's Signature: _____