



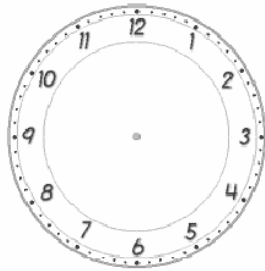
name \_\_\_\_\_

### Year One Maths Homework

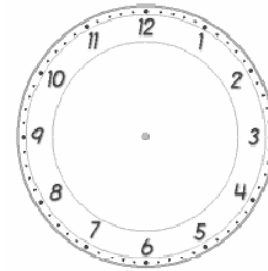
This homework relates to Maths work covered in class this week. Children are revising telling the time, in analogue format, in terms of o'clock and half-past. Help your child to read the time and then record it on the blank clocks below. Remind your child to make sure that the "hour hand" extends **beyond** the numbers on the clock face. When recording "half-past", remind your child that the "minute hand" should be positioned **between** the numbers on the clock face.

## o'clock and half-past

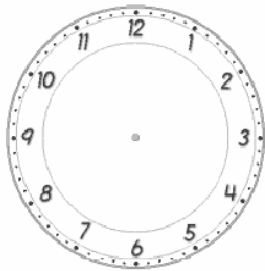
Draw the hands on the analogue clocks to show the right time.



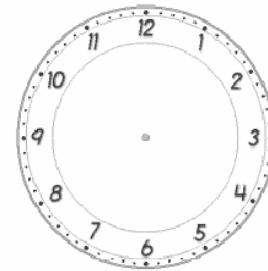
10 o'clock



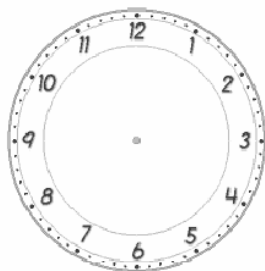
Half-past 5



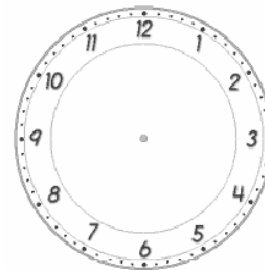
Half-past 1



9 o'clock



6 o'clock



Half-past 5

Please see your child's class teacher if you have any further questions on this particular piece of homework or to find out how to provide additional support/extension work.

This homework is due back to school on Monday.

Parent's Signature: \_\_\_\_\_

