

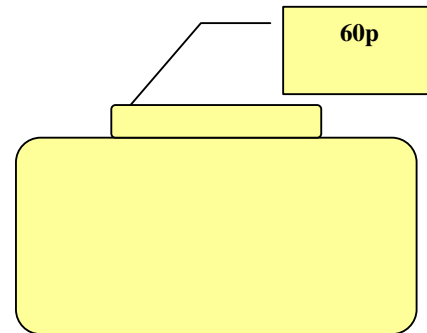
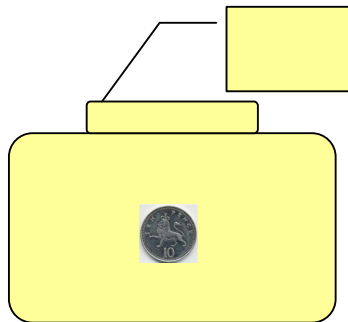
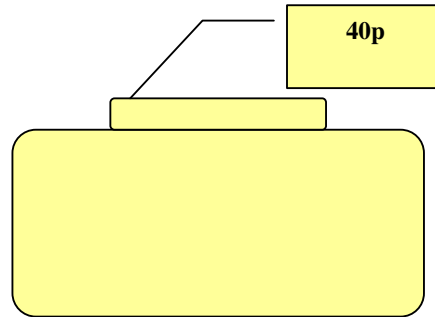
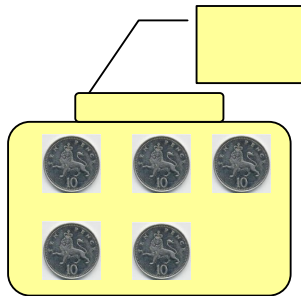
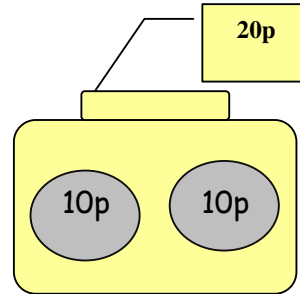
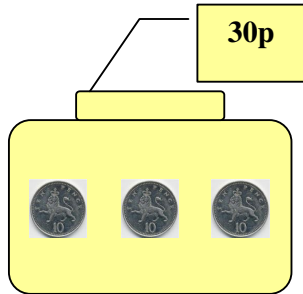
name _____

Year One Maths Homework



**Adding multiples of 10
with money**

Write down **how** much money is in each purse or
draw the coins to match the total of each purse.



Please see your child's class teacher if you have any further questions on this particular piece of homework or to find out how to provide additional support/extension work.

This homework is due back to school on Friday.

Parent's Signature: _____