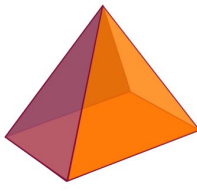






Name \_\_\_\_\_

**Year One Maths Homework**

This homework relates to Maths work covered in class this week.

Look at the 3D shapes and write down their **names** and **list 4** properties of each shape.

<p><b>Rectangular Pyramid</b></p> 	<ul style="list-style-type: none"><li>• 4 faces are triangle</li><li>• 1 face is rectangle</li><li>• It has 8 edges</li><li>• 5 corners</li></ul>
	
	
	
	

Unless otherwise stated, we expect your child to complete these tasks independently. Please see your child's class teacher if you have any further questions on this particular piece of homework or to find out how to provide additional support/extension work.

This homework is due back to school on Friday.

Parent's Signature: \_\_\_\_\_

