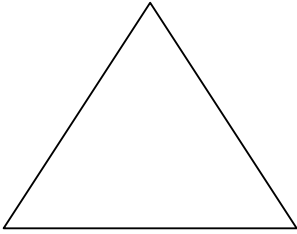
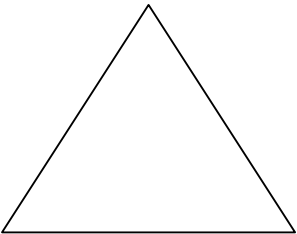
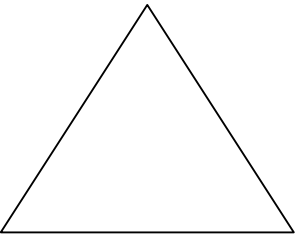
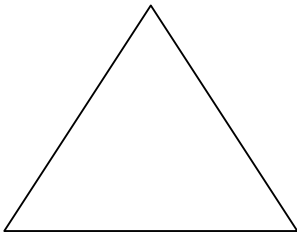
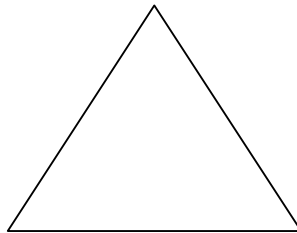
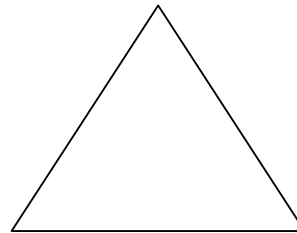
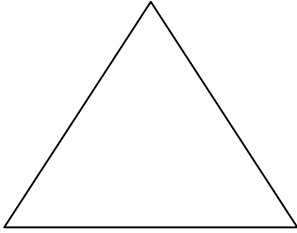
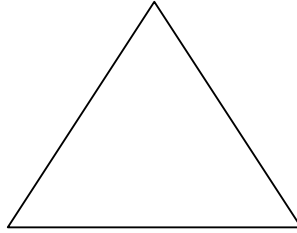
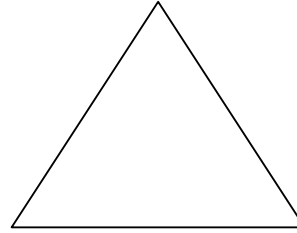


Name _____

Year One Maths Homework

This homework relates to Maths work covered in class this week. Children are learning pairs of numbers which total 10.

Making 10		Write 2 numbers at the bottom of each triangle that add up to 10. Use coins or buttons to help you if you get stuck.
<p>10</p>  <p>9 1</p>	<p>10</p> 	<p>10</p> 
<p>10</p> 	<p>10</p> 	<p>10</p> 
<p>10</p> 	<p>10</p> 	<p>10</p> 

Unless otherwise stated, we expect your child to complete these tasks independently. Please see your child's class teacher if you have any further questions on this particular piece of homework or to find out how to provide additional support/extension work.

This homework is due back to school on Friday.

Parent's Signature: _____