


name _____



Year One Maths Homework

This homework relates to Maths work covered in class this week. Children are revising doubling numbers within 10.

Double these numbers.
The first one is done for you.

$$2 + 2 = 4$$




$$3 + =$$




4




5



7



10



Unless otherwise stated, we expect your child to complete these tasks independently. Please see your child's class teacher if you have any further questions on this particular piece of homework or to find out how to provide additional support/extension work.