


Name _____

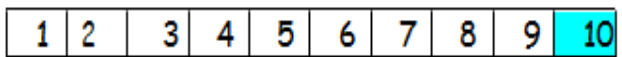
Year One Maths Homework

This homework relates to Maths work covered in class this week. Children are revising using a number line to count back from 10.


Use the number line to calculate these sums. Start on the shaded number and then count back and write down the new number you finish on




$$10 - 4 = \underline{6}$$




$$10 - 7 = \underline{3}$$




$$10 - 2 = \underline{\quad}$$




$$10 - 9 = \underline{\quad}$$




$$10 - 0 = \underline{\quad}$$



$$10 - 8 = \underline{\quad}$$



$$10 - 5 = \underline{\quad}$$



$$10 - 6 = \underline{\quad}$$

Unless otherwise stated, we expect your child to complete these tasks independently. Please see your child's class teacher if you have any further questions on this particular piece of homework or to find out how to provide additional support/extension work.

This homework is due back to school on Monday.

Parent's Signature: _____

N

