

name _____

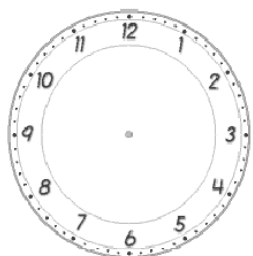
Year One Maths Homework



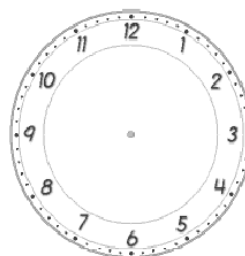
This homework relates to Maths work covered in class this week. Children are revising telling the time, in analogue format, in terms of o'clock and half-past. Help your child to read the time and then record it on the blank clocks below. Remind your child to make sure that the "hour hand" extends **beyond** the numbers on the clock face. When recording "half-past", remind your child that the "minute hand" should be positioned **between** the numbers on the clock face.

o'clock and half-past

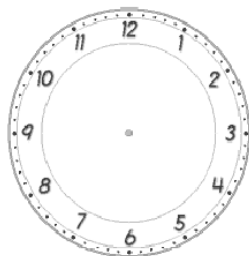
Draw the hands on the analogue clocks to show the right time.



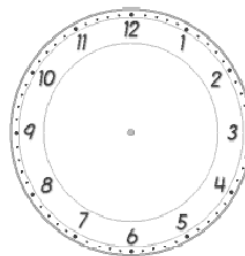
10 o'clock



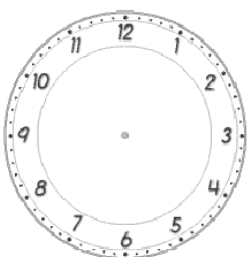
Half-past 5



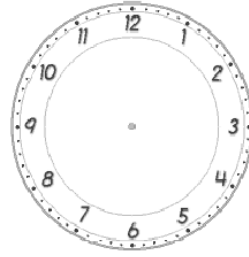
Half-past 1



9 o'clock



6 o'clock



Half-past 5

Please see your child's class teacher if you have any further questions on this particular piece of homework or to find out how to provide additional support/extension work.

This homework is due back to school on Friday.

Parent's Signature: _____

