






Name _____

Year One Maths Homework

This homework relates to Maths work covered in class this week.

This homework relates to Maths work covered in class. Children should be able to mentally recall odd and even numbers within 20. Get your child to count the number of objects on the left and write the figures on the right hand side of the column.

	How many?
	
	
	
	
	

Unless otherwise stated, we expect your child to complete these tasks independently. Please see your child's class teacher if you have any further questions on this particular piece of homework or to find out how to provide additional support/extension work.

This homework is due back to school on Friday.

Parent's Signature: _____